



Q4

A website is made up of different types of files.

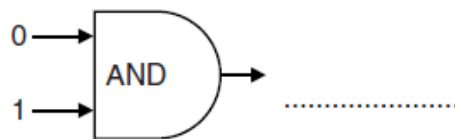
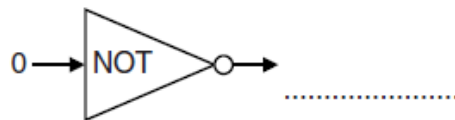
State what each of the file types in the table below is used for.

File type	Use
HTML	
JPG	
MP3	
PDF	

[4]

Q5

State the output of each of the following logic circuits for the inputs given.



[2]

Q6

Fig. 1 is a circuit diagram.

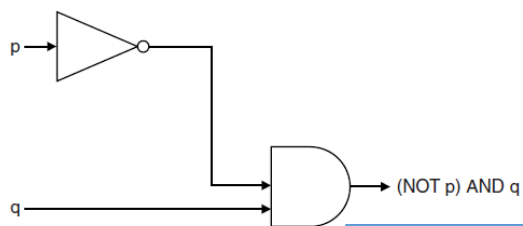


Fig. 1

Complete the truth table for Fig. 1.

p	q	(NOT p) AND q
0	0	0
1	0	0

[3]